

Chapter 3 Review Section 3.1 Extra Practice

1. Graph each function using a table of values. Then, identify the domain and range.

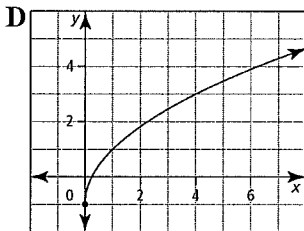
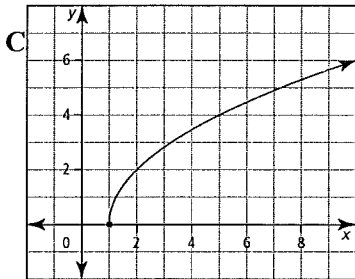
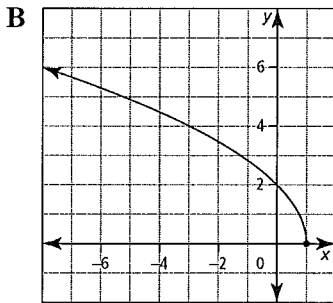
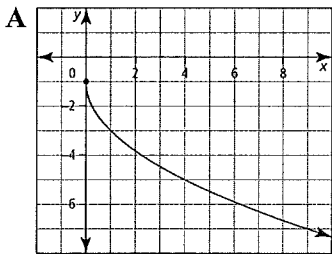
- a) $y = \sqrt{x+2}$ b) $y = \sqrt{x} - 4$
 c) $y = \sqrt{5-x}$ d) $y = \sqrt{-3x+1}$

2. Explain how to transform the graph of $y = \sqrt{x}$ to obtain the graph of each function. State the domain and range in each case.

- a) $y = 3\sqrt{x-5}$ b) $y = -\sqrt{x} + 7$
 c) $y = 0.25\sqrt{0.25x} - 3$ d) $5 + y = \sqrt{-(x+1)}$

3. Match each function with its graph.

- a) $y = 2\sqrt{x} - 1$ b) $y = -2\sqrt{x} - 1$
 c) $y = 2\sqrt{x-1}$ d) $y = 2\sqrt{-(x-1)}$



6. Sketch each set of functions on the same graph.

- a) $y = -\sqrt{x}$, $y = -\sqrt{x-3} + 5$ b) $y = 4\sqrt{x}$, $y = 4\sqrt{\frac{1}{3}x}$
 c) $y = -\sqrt{x}$, $y = -\sqrt{2x}$

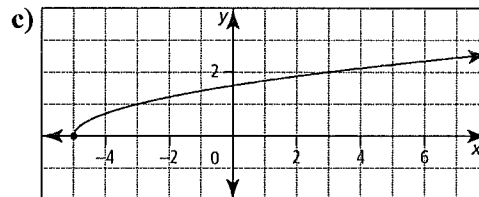
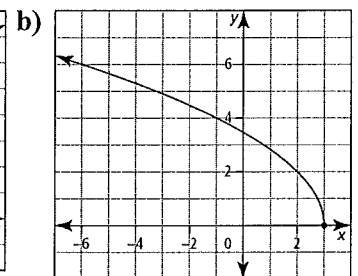
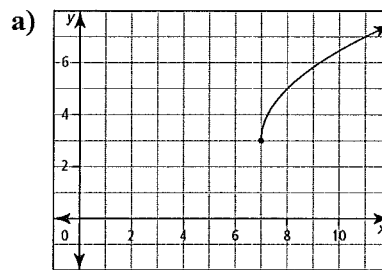
7. Sketch the graph of each function using transformations.

- a) $y = 2\sqrt{x-4} - 5$ b) $y = -3\sqrt{x} + 6$
 c) $y = -\sqrt{0.5x} + 1$ d) $y - 9 = \sqrt{2(x+3)}$

8. State the domain and range of each function.

- a) $y = \sqrt{-x} - 4$ b) $y = 4\sqrt{x-4}$
 c) $y - 4 = -\sqrt{x-4}$ d) $y = -\sqrt{4x}$

9. For each function, write an equation of a radical function of the form $y = a\sqrt{b(x-h)} + k$.



10. Explain how to transform the graph of $y = \sqrt{x}$ to obtain the graph of each function.

- a) $y = \sqrt{-x-7}$ b) $y = \sqrt{2x-6} + 5$ c) $y - 7 = \sqrt{5-x}$

Section 3.2 Extra Practice

1. Complete the table.

x	$f(x)$	$\sqrt{f(x)}$
-2	16	
-1	8	
0		2
1		1.4
2	1	

2. For each point given on the graph of $y = f(x)$, does a corresponding point on the graph of $y = \sqrt{f(x)}$ exist? If so, state the coordinates to the nearest hundredth.

- a) (9, 14) b) (p, r) c) (-2, 7) d) (-32, -1)

4. Write the equation of a radical function that would result by applying each set of transformations to the graph of $y = \sqrt{x}$.

- a) vert. exp by a factor of 3, and hor. comp. by a factor of 2
 b) horizontal reflection in the y -axis, translation up 3 units, and translation left 2 units
 c) vert. reflection in the x -axis, horizontal stretch by a factor of $\frac{1}{3}$, and translation down 7 units
 d) vertical exp. by a factor of 5, horizontal comp. by a factor of 0.25, and translation right 6

5. Explain how to transform the graph of $y = \sqrt{x}$ to obtain the graph of each function.

- a) $y = 5\sqrt{x+7} - 2$ b) $y = -4\sqrt{-x} + 8$
 c) $y = \sqrt{0.25(x-1)}$ d) $y + 3 = \sqrt{\frac{1}{3}(x+4)}$

3. For each function, graph $y = \sqrt{f(x)}$.

a) $f(x) = x^2 - 9$ b) $f(x) = -x^2 + 9$ c) $f(x) = x^2 + 9$

4. a) Sketch the graph of $f(x) = x + 4$.

b) State the domain and range of $y = f(x)$.

c) Sketch the graph of $y = \sqrt{f(x)}$.

d) State the domain and range of $y = \sqrt{f(x)}$.

5. For each function, graph $y = \sqrt{f(x)}$ and state the domain and range of $y = \sqrt{f(x)}$.

a) $f(x) = x - 4$ b) $f(x) = x + 9$ c) $f(x) = x - 9$

6. Determine the domains and ranges of each pair of functions. Explain why the domains and ranges differ.

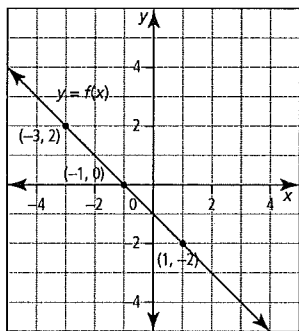
a) $y = x + 5$, $y = \sqrt{x + 5}$ b) $y = 3x - 9$; $y = \sqrt{3x - 9}$

c) $y = -x - 10$, $y = \sqrt{-x - 10}$

7. Identify the domain and range of $y = \sqrt{f(x)}$.

a) $f(x) = x^2 - 16$ b) $f(x) = x^2 + 5$ c) $f(x) = 2x^2 + 18$

8. Using the graph of $y = f(x)$, sketch the graph of $y = \sqrt{f(x)}$.

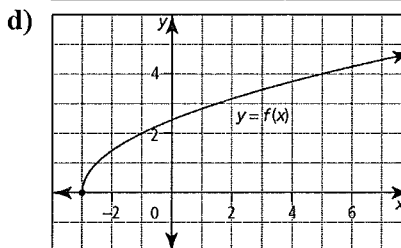
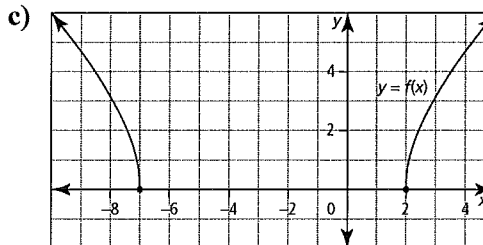
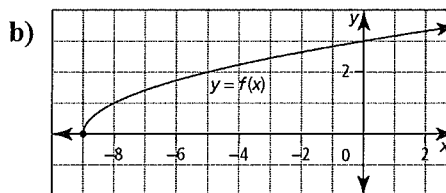
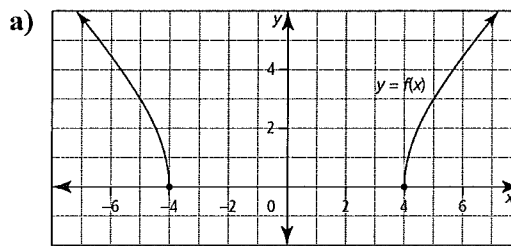


radical equation?

a) $\sqrt{5x^2 + 11} = x + 5$ b) $x + 3 = \sqrt{2x^2 - 7}$

c) $\sqrt{13 - 4x^2} = 2 - x$ d) $x + \sqrt{-2x^2 + 9} = 3$

3. Use each graph to solve the equation $f(x) = 0$.



9. a) Sketch the graphs of $y = x^2 + x - 20$ and $y = \sqrt{x^2 + x - 20}$.

b) Why is the graph of $y = \sqrt{x^2 + x - 20}$ undefined over an interval?

10.a) Give examples of points on the graph of $y = f(x)$ that would be invariant when graphing $y = \sqrt{f(x)}$.

b) Give examples of points on of $y = f(x)$ that would be undefined on the graph of $y = \sqrt{f(x)}$.

4. Solve each equation graphically.

a) $\sqrt{2x+1} = 3$ b) $\sqrt{x-3} + 6 = 2$

c) $\sqrt{4(x+3)} = 6$ d) $2\sqrt{x-1} - 2 = 8$

5. Solve. a) $x - \sqrt{x+2} = 0$ b) $\sqrt{x+4} + 8 = x$

c) $\sqrt{x-1} + 3 - x = 0$ d) $x = \sqrt{x+10} + 2$

6. Solve to the nearest tenth.

a) $\sqrt{x-2} = x-3$ b) $\sqrt{x+1} + 5 = 2x$

c) $x\sqrt{3} + 4 = x$ d) $\sqrt{x^2 - 4} = 2x - 10$

7. Tanya says that the equation $\sqrt{1-x} + 2 = 0$ has no solutions.

a) Show that Tanya is correct, using both a graphical and an algebraic approach.

b) Is it possible to tell that this equation has no solutions simply by examining the equation? Explain.

c) horizontal exp. by a factor of 4, translation right 1 unit

d) horizontal exp. by a factor of 4, translation right 1 unit

Section 3.3 Extra Practice

1. Solve each equation algebraically.

a) $\sqrt{x+1} + 3 = 5$ b) $\sqrt{4-3x} = 2$

c) $\sqrt{0.5(3x-2)} + 2 = 1$ d) $-3\sqrt{x+2} + 4 = 1$

8. The speed of a tsunami wave in the ocean is related to the depth of the water by the equation $s = 3\sqrt{d}$, where s is the speed of the wave, in metres per second, and d is the depth of the water, in metres. What is the depth of the water, to the nearest metre, if the speed of a tsunami wave is 10 m/s?

9. The radius, r , of a sphere is related to the surface area, A , by the equation $r = \frac{1}{2}\sqrt{\frac{A}{\pi}}$.

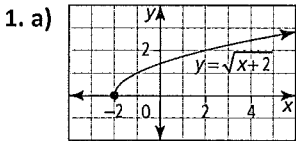
a) The surface area of a baseball is about 172 cm^2 . Find the radius of a baseball, to the nearest tenth of a centimetre.

b) The radius of a tennis ball is about 3.3 cm. Find the surface area, to the nearest square centimetre.

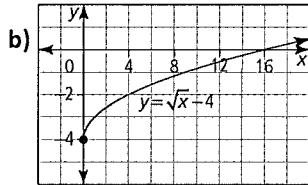
10. Solve. $\sqrt{x + \sqrt{x - 2}} = 2$

Chapter 3 Answers

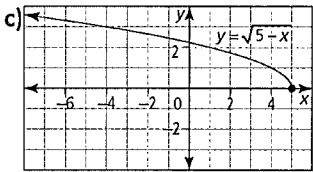
Section 3.1 Extra Practice



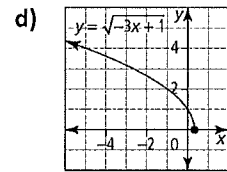
domain: $\{x \mid x \geq -2, x \in \mathbb{R}\}$;
range: $\{y \mid y \geq 0, y \in \mathbb{R}\}$



domain: $\{x \mid x \geq 0, x \in \mathbb{R}\}$;
range: $\{y \mid y \geq -4, y \in \mathbb{R}\}$



domain: $\{x \mid x \leq 5, x \in \mathbb{R}\}$
range: $\{y \mid y \geq 0, y \in \mathbb{R}\}$



domain: $\{x \mid x \leq \frac{1}{3}, x \in \mathbb{R}\}$;
range: $\{y \mid y \geq 0, y \in \mathbb{R}\}$

2. a) vertical exp. by a factor of 3, translation right 5 units;

domain: $\{x \mid x \geq 5, x \in \mathbb{R}\}$; range: $\{y \mid y \geq 0, y \in \mathbb{R}\}$

b) vertical reflection in the x -axis, translation up

7 units; domain: $\{x \mid x \geq 0, x \in \mathbb{R}\}$; range: $\{y \mid y \leq 7, y \in \mathbb{R}\}$

c) vertical comp. by a factor of 0.25, horizontal comp. by a factor of 4, translation down 3 units; domain: $\{x \mid x \geq 0, x \in \mathbb{R}\}$; range: $\{y \mid y \geq -3, y \in \mathbb{R}\}$

d) horizontal reflection in the y -axis, translation left 1, translation down 5; domain: $\{x \mid x \leq -1, x \in \mathbb{R}\}$; range: $\{y \mid y \geq -5, y \in \mathbb{R}\}$

3. a) D b) A c) C d) B

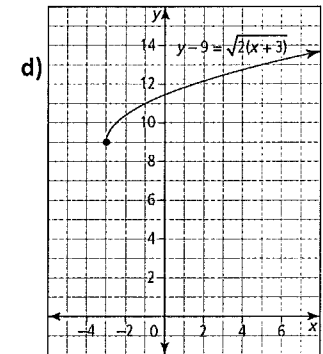
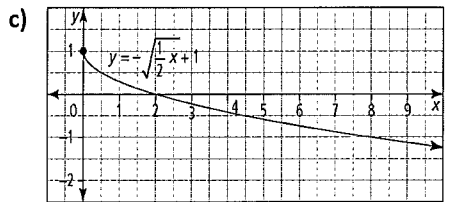
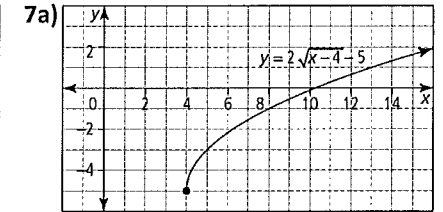
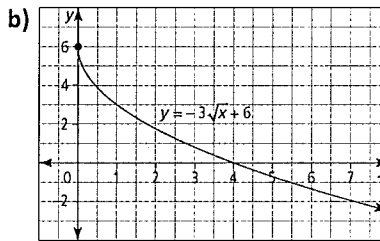
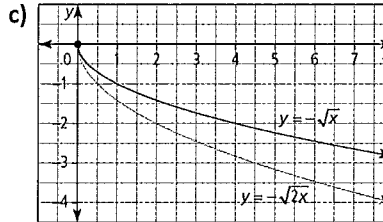
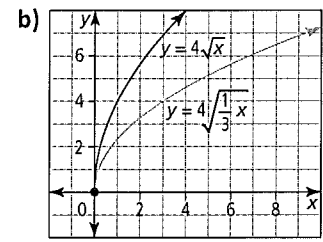
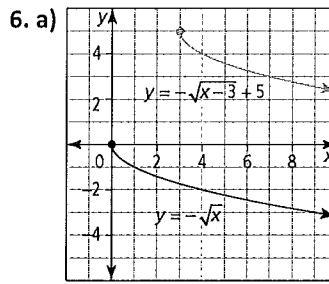
4. a) $y = 3\sqrt{0.5x}$ b) $y = \sqrt{-(x+2)} + 3$

c) $y = -\sqrt{3x-7}$ d) $y = 5\sqrt{4(x-6)}$

5. a) vertical exp. by a factor of 5, translation down 2, translation left 7

b) vertical exp. by a factor of 4, reflection in the x -axis, reflection in the y -axis, translation up 8.

d) horizontal exp. by a factor of 3, translation down 3, translation left 4



8. a) domain: $\{x \mid x \leq 0, x \in \mathbb{R}\}$; range:

$\{y \mid y \geq -4, y \in \mathbb{R}\}$ b) domain: $\{x \mid x \geq 4, x \in \mathbb{R}\}$; range: $\{y \mid y \geq 0, y \in \mathbb{R}\}$ c)

domain: $\{x \mid x \geq 4, x \in \mathbb{R}\}$; range: $\{y \mid y \leq 4, y \in \mathbb{R}\}$

d) domain: $\{x \mid x \geq 0, x \in \mathbb{R}\}$; range: $\{y \mid y \leq 0, y \in \mathbb{R}\}$

9. a) $y = 2\sqrt{x-7} + 3$ b) $y = 2\sqrt{-(x-3)}$ c) $y = \sqrt{0.5(x+5)}$

10. a) reflection in the y -axis, translation left 7 units

b) horizontal comp. by a factor of $\frac{1}{2}$, translation right 3 units, translation up 5 units

c) reflection in y -axis, translation right 5, translation up 7

Section 3.2 Extra Practice

1.

x	$f(x)$	$\sqrt{f(x)}$
-2	16	4
-1	8	2.83
0	4	2
1	1.96	1.4
2	1	1

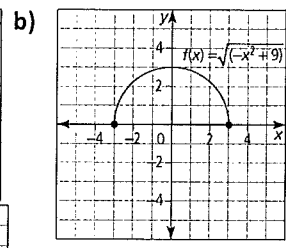
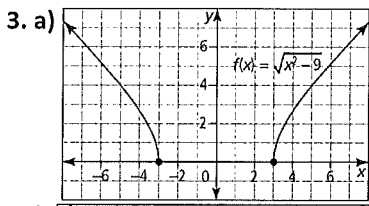
2. a) (9, 3.74)

b) (p, \sqrt{r})

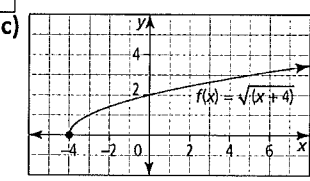
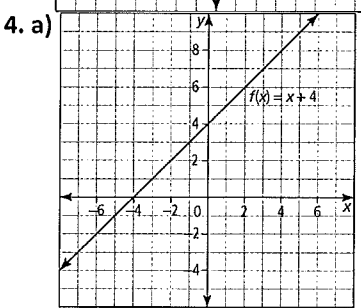
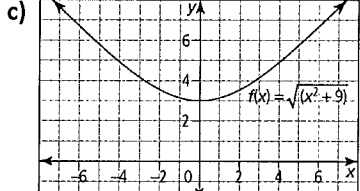
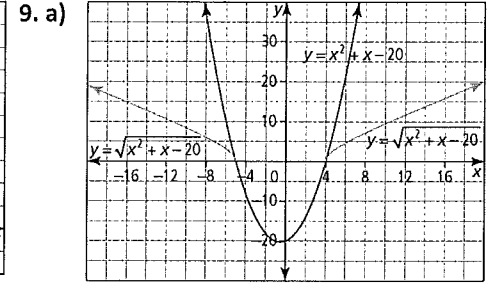
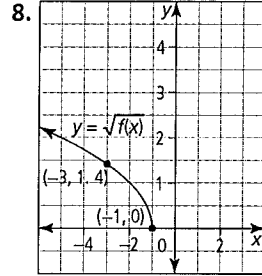
c) (-2, 2.65)

d) No corresponding point exists.

7. a) domain: $\{x \mid x \leq -4 \text{ and } x \geq 4, x \in \mathbb{R}\}$; range: $\{y \mid y \geq 0, y \in \mathbb{R}\}$



b) domain: $\{x \mid x \in \mathbb{R}\}$; range: $\{y \mid y \geq \sqrt{5}, y \in \mathbb{R}\}$
 c) domain: $\{x \mid x \in \mathbb{R}\}$; range: $\{y \mid y \geq \sqrt{18}, y \in \mathbb{R}\}$



9b) Example: The graph of $y = x^2 + x - 20$ has y -values that are less than zero for values of x between -5 and 4 . Therefore, $y = \sqrt{x^2 + x - 20}$ is undefined for this interval of x .

10. a) Example: all points that have a y -value of 0 or 1
 b) Example: all points that have a negative y -value

d) domain: $\{x \mid x \geq -4, x \in \mathbb{R}\}$;
 range: $\{y \mid y \geq 0, y \in \mathbb{R}\}$

Section 3.3 Extra Practice

1. a) $x = 3$ b) $x = 0$ c) no solution d) $x = -1$

2. Example: In each case, graph the single function and identify the x -intercepts or graph the set of functions and identify the x -value of the point of intersection.

a) $y = \sqrt{5x^2 + 11} - x - 5$ or $y = \sqrt{5x^2 + 11}$
 $y = x + 5$

b) $y = \sqrt{2x^2 - 7} - x - 3$ or $y = \sqrt{2x^2 - 7}$
 $y = x + 3$

c) $y = \sqrt{13 - 4x^2} - 2 + x$ or $y = \sqrt{13 - 4x^2}$
 $y = 2 - x$

d) $y = \sqrt{-2x^2 + 9} + x - 3$ or $y = \sqrt{-2x^2 + 9}$
 $y = 3 - x$

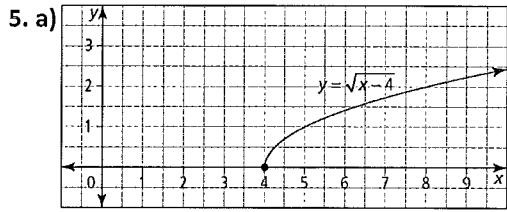
3. a) $x = 4$ and $x = -4$ b) $x = -9$ c) $x = 2$ and $x = -7$ d) $x = -3$

4. a) $x = 4$ b) no solution c) $x = 6$ d) $x = 26$

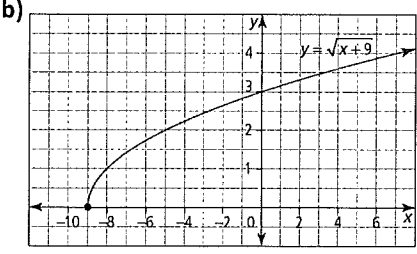
5. a) $x = 2$ b) $x = 12$ c) $x = 5$ d) $x = 6$

6. a) $x = 4.6$ b) $x = 3.6$ c) $x = -5.5$ d) $x = 9.8$

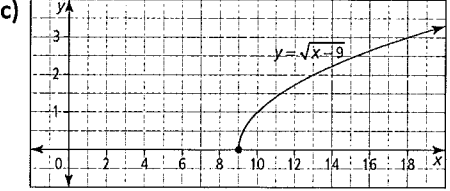
b) domain: $\{x \mid x \in \mathbb{R}\}$; range: $\{y \mid y \in \mathbb{R}\}$



domain: $\{x \mid x \geq 4, x \in \mathbb{R}\}$; range: $\{y \mid y \geq 0, y \in \mathbb{R}\}$



domain: $\{x \mid x \geq -9, x \in \mathbb{R}\}$; range: $\{y \mid y \geq 0, y \in \mathbb{R}\}$

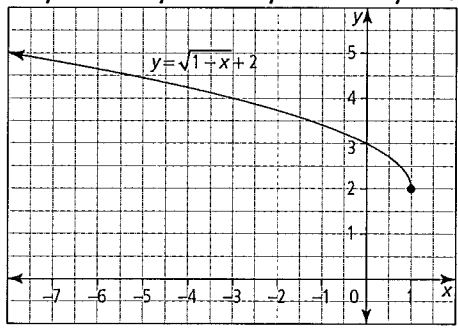


domain: $\{x \mid x \geq 9, x \in \mathbb{R}\}$; range: $\{y \mid y \geq 0, y \in \mathbb{R}\}$

6. a) $y = x + 5$: domain: $\{x \mid x \in \mathbb{R}\}$, range: $\{y \mid y \in \mathbb{R}\}$;
 $y = \sqrt{x + 5}$: domain: $\{x \mid x \geq -5, x \in \mathbb{R}\}$, range: $\{y \mid y \geq 0, y \in \mathbb{R}\}$

b) $y = 3x - 9$: domain: $\{x \mid x \in \mathbb{R}\}$, range: $\{y \mid y \in \mathbb{R}\}$;
 $y = \sqrt{3x - 9}$: domain: $\{x \mid x \geq 3, x \in \mathbb{R}\}$, range: $\{y \mid y \geq 0, y \in \mathbb{R}\}$

c) $y = -x - 10$: domain: $\{x \mid x \in \mathbb{R}\}$, range: $\{y \mid y \in \mathbb{R}\}$;
 $y = \sqrt{-x - 10}$: domain: $\{x \mid x \leq -10, x \in \mathbb{R}\}$, range: $\{y \mid y \geq 0, y \in \mathbb{R}\}$



algebraic approach:

$$\sqrt{1 - x} + 2 = 0$$

$$\sqrt{1 - x} + 2 - 2 = 0 - 2$$

$$\sqrt{1 - x} = -2$$

This result is not possible because a square root cannot equal a negative value.

b) Example: Yes; isolate the radical. If it is equal to a negative value, then the equation has no solution.

8. 11 m 9. a) 3.7 cm b) 137 cm² 10. $x = 3$