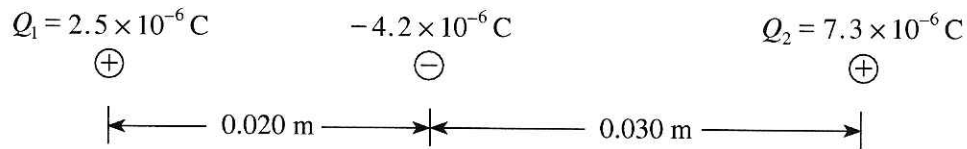


3. A -4.2×10^{-6} C charge, is placed between two stationary charges, Q_1 and Q_2 , as shown below.



What is the magnitude and direction of the net force on the -4.2×10^{-6} C charge due to the **two** stationary charges? **(7 marks)**

$$F_{net} = F_1 + F_2 \quad \leftarrow \text{1 mark}$$

$$F_1 = \frac{kQ_1Q}{R^2} = \frac{9.00 \times 10^9 \times 2.5 \times 10^{-6} \times -4.2 \times 10^{-6} \text{ C}}{(0.02)^2} = -236.25 \text{ N (left)} \quad \leftarrow \text{2 marks}$$

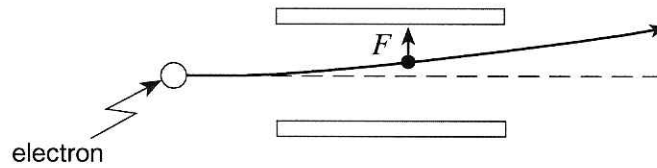
$$F_2 = \frac{kQ_2Q}{R^2} = \frac{9.00 \times 10^9 \times 7.3 \times 10^{-6} \times -4.2 \times 10^{-6} \text{ C}}{(0.030)^2} = -306.6 \text{ N (right)} \quad \leftarrow \text{2 marks}$$



$$F_{net} = 306.6 - 236.25 \quad \leftarrow \text{1 mark}$$

$$= 70 \text{ N (right)} \quad \leftarrow \text{1 mark}$$

4. An electron passing between parallel plates 0.025 m apart experiences an upward electrostatic force of 5.1×10^{-16} N.



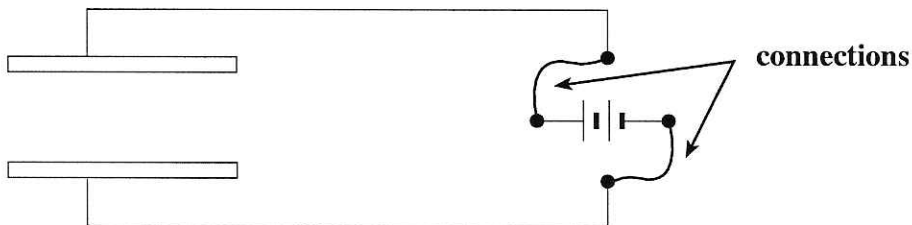
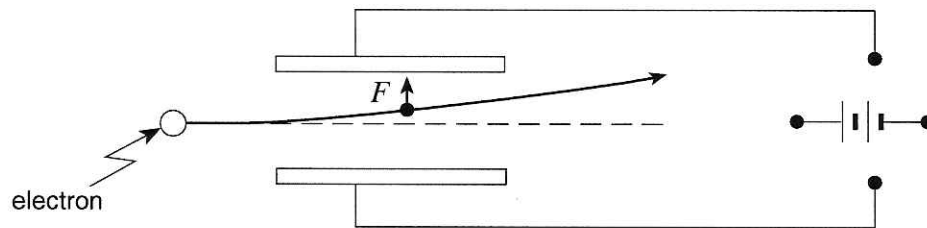
- a) What is the magnitude of the electric field between the plates? **(3 marks)**

$$\begin{aligned} E &= \frac{F}{q} && \leftarrow \text{1 mark} \\ &= \frac{5.1 \times 10^{-16} \text{ N}}{1.6 \times 10^{-19} \text{ C}} && \leftarrow \text{1}\frac{1}{2} \text{ marks} \\ &= 3.2 \times 10^3 \text{ N/C} && \leftarrow \frac{1}{2} \text{ mark} \end{aligned}$$

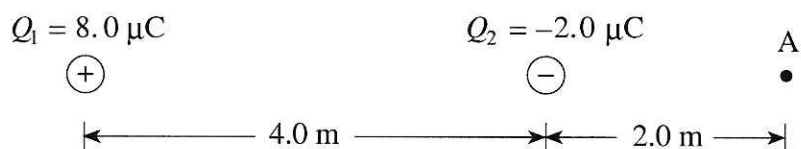
- b) What is the potential difference between the plates? **(2 marks)**

$$\begin{aligned} E &= \frac{V}{d} && \leftarrow \text{1 mark} \\ V &= Ed \\ &= 3.2 \times 10^3 \times 0.025 \\ &= 80 \text{ V} && \leftarrow \text{1 mark} \end{aligned}$$

- c) On the diagram below draw in the connections to the power supply necessary for the electron to experience this upward force. **(2 marks)**



5. Two charges are positioned as shown in the diagram below.



a) Find the magnitude and direction of the electric field at A. (Note: $1.0 \mu\text{C} = 1.0 \times 10^{-6} \text{ C}$)
(4 marks)

$$E_1 = \frac{kQ_1}{r_1^2} = \frac{9.0 \times 10^9 \times 8.0 \times 10^{-6}}{6.0^2} = 2.0 \times 10^3 \text{ N/C to the right} \quad \leftarrow 1\frac{1}{2} \text{ marks}$$

$$E_2 = 4.5 \times 10^3 \text{ N/C to the left} \quad \leftarrow 1\frac{1}{2} \text{ marks}$$

$$E = 2.5 \times 10^3 \text{ N/C to the left} \quad \leftarrow 1 \text{ mark}$$

b) A charge placed at A experiences a force of $4.0 \times 10^{-3} \text{ N}$ towards the right. What are the magnitude and polarity of this charge?
(3 marks)

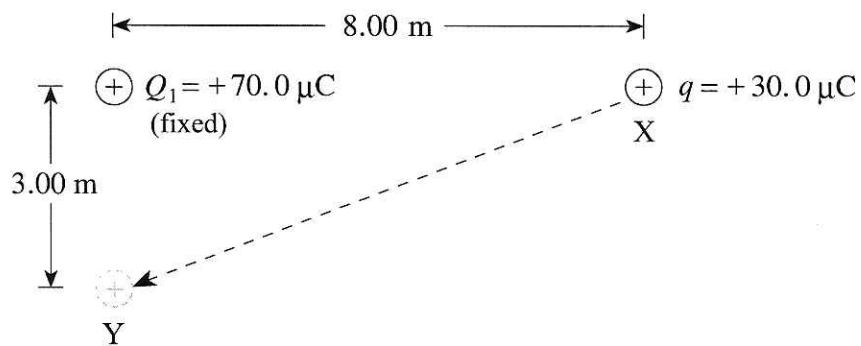
$$E = \frac{F}{q} \rightarrow q = \frac{F}{E} \quad \leftarrow 1 \text{ mark}$$

$$= \frac{4.0 \times 10^{-3} \text{ N}}{2.5 \times 10^3 \text{ N/C}} \quad \leftarrow 1 \text{ mark}$$

$$= 1.6 \times 10^{-6} \text{ C, negative} \quad \leftarrow 1 \text{ mark}$$

Answer: $-1.6 \times 10^{-6} \text{ C}$

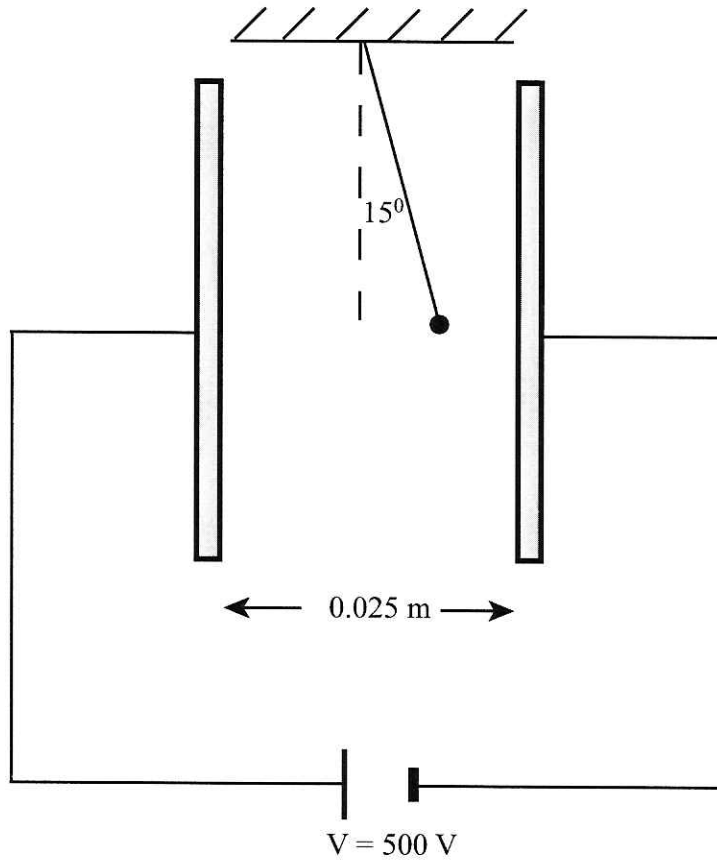
6. A charge q of $30.0 \mu\text{C}$ is moved from point X to point Y.



How much work is done on the $30.0 \mu\text{C}$ charge? ($1 \mu\text{C} = 1 \times 10^{-6} \text{ C}$) (7 marks)

$$\begin{aligned}
 W &= \Delta E && \leftarrow \text{1 mark} \\
 &= E_{p_y} - E_{p_x} && \leftarrow \text{2 marks} \\
 &= \frac{kQq}{r_y} - \frac{kQq}{r_x} && \leftarrow \text{1 mark} \\
 &= \frac{9.00 \times 10^9 \cdot 70.0 \times 10^{-6} \cdot 30.0 \times 10^{-6}}{3.00} - \frac{9.00 \times 10^9 \cdot 70.0 \times 10^{-6} \cdot 30.0 \times 10^{-6}}{8.00} && \left. \right\} \leftarrow \text{2 marks} \\
 &= (6.3 - 2.4) \text{ J} \\
 &= 3.9 \text{ J} && \leftarrow \text{1 mark}
 \end{aligned}$$

7. A small 4.0×10^{-3} kg charged sphere is suspended by a light thread between parallel plates, as shown in the diagram below. When the plates are connected to a 500 V source, the thread makes a 15° angle with the vertical.



What is the charge on the sphere? (9 marks)

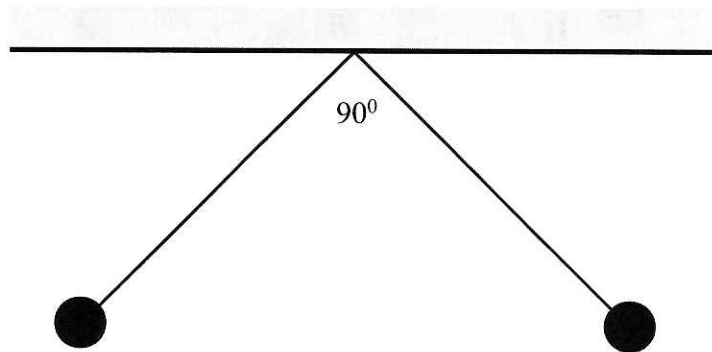
$$E = \frac{V}{d} = \frac{500\text{V}}{0.025\text{m}} = 2.0 \times 10^4 \text{ V/m} \leftarrow 2 \text{ marks}$$

Free body diagram showing forces T (up and left), F_e (right), and W (down). The angle between T and the vertical is 15° .

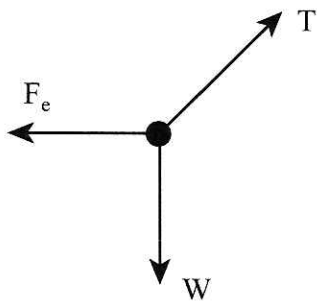
$$\left. \begin{aligned} F_e &= W \tan 15^\circ \\ &= (4.0 \times 10^{-3}) (9.8) (\tan 15^\circ) \\ &= 1.05 \times 10^{-2} \text{ N} \end{aligned} \right\} 4 \text{ marks}$$

$$\left. \begin{aligned} F_e &= qE \\ q &= \frac{F_e}{E} = \frac{1.05 \times 10^{-2}}{2.0 \times 10^4} \\ &= 5.3 \times 10^{-7} \text{ C} \end{aligned} \right\} 3 \text{ marks}$$

8. Two small, identically-charged conducting spheres each of mass 2.5×10^{-4} kg hang from the same point on insulating threads of length 0.50 m as shown in the diagram below. If the enclosed angle between the threads is 90° , what is the charge on each sphere? **(9 marks)**



FBD

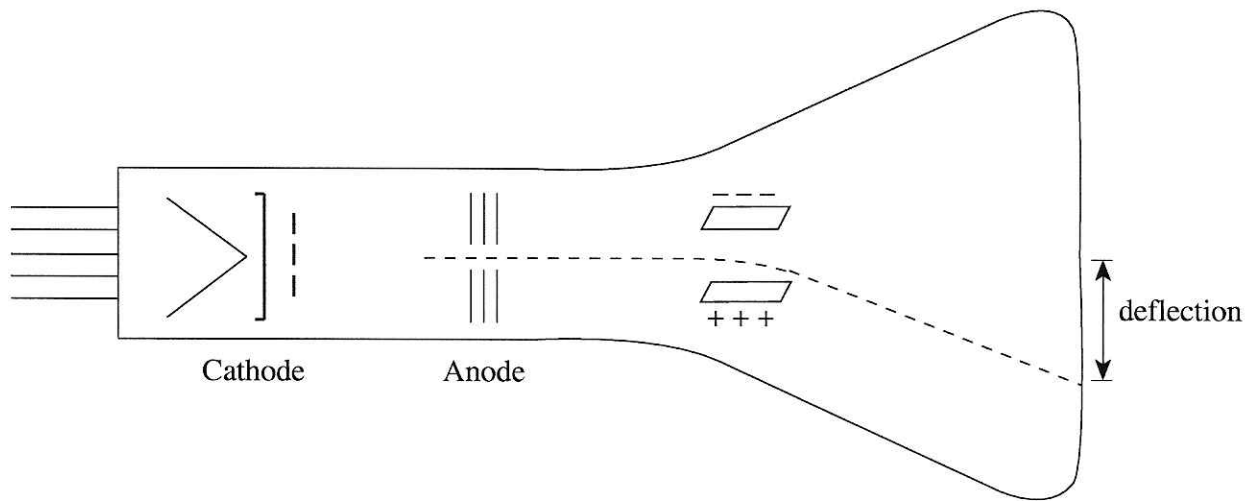


$$\left. \begin{array}{l} \sum F_x = 0 \\ T_x = F_e \\ \sum F_y = 0 \\ T_y = F_g \end{array} \right\} 2 \text{ marks}$$

$$\left. \begin{array}{l} \text{since } \theta = 45^\circ \\ T_x = T_y \\ F_e = F_g = mg \end{array} \right\} 2 \text{ mark}$$

$$\left. \begin{array}{l} F_e = \frac{kq^2}{r^2} = mg \\ \therefore q = \sqrt{\frac{mgr^2}{k}} = 3.7 \times 10^{-7} \text{ C} \end{array} \right\} 5 \text{ marks}$$

9. In a cathode-ray tube, electrons are accelerated from the cathode towards the anode by an accelerating voltage V_a . After passing through the anode, the electrons are deflected by the two oppositely-charged parallel plates.



If the accelerating voltage V_a is increased, will the deflection increase, decrease, or remain the same? Using principles of physics, explain your answer. **(4 marks)**

The deflection y will decrease.

If V_a is increased, the electrons are given a greater kinetic energy: e.g., $V_a = \frac{\Delta E_k}{q}$. Hence, the

electrons are moving faster, so they spend less time between the plates. A force accelerates the electrons transversely between the plates; however, as the acceleration occurs for a shorter time, their deflection is reduced; e.g., $y = \frac{1}{2}at^2$.